

# PRACTICE TEST


**Full name:** ..... **Class:** 1 .....

**School:** ..... **Date:** ...../..... / 2020


**I. Color in the circles to help the dinosaur find his friend. / Tô màu các hình tròn giúp khủng long tìm bạn của mình.**



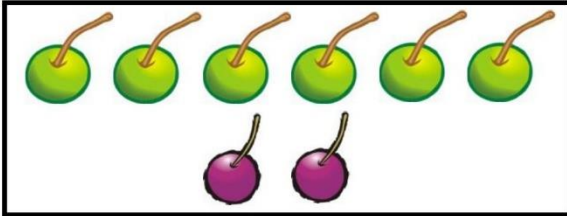
**II. Count the fruit and write equations. / Nhìn tranh và viết phép tính.**




$$\dots + \dots = \dots$$




$$\dots + \dots = \dots$$




$$\dots + \dots = \dots$$




$$\dots + \dots = \dots$$



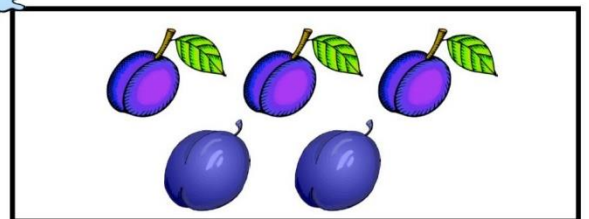
$$\dots + \dots = \dots$$



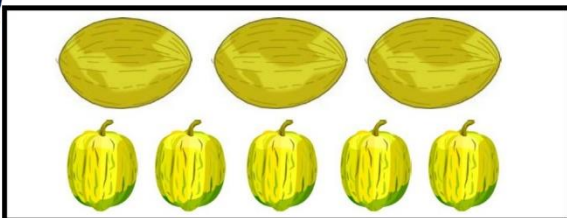
$$\dots + \dots = \dots$$



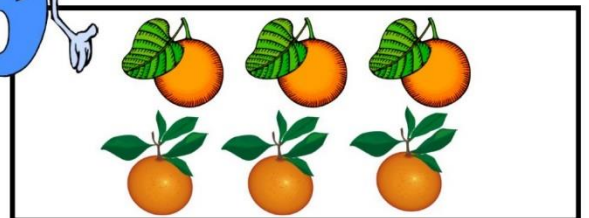
$$\dots + \dots = \dots$$



$$\dots + \dots = \dots$$




$$\dots + \dots = \dots$$





$$\dots + \dots = \dots$$


**III. Complete the subtraction equations. / Thực hiện phép tính.**


  $4 - 2 = \underline{2}$

  $4 - 3 = \underline{\quad}$


  $7 - 1 = \underline{\quad}$

  $3 - 2 = \underline{\quad}$

  $8 - 5 = \underline{\quad}$

  $10 - 7 = \underline{\quad}$

**IV. Color in the art. / Tô màu những hình dưới đây.**



**V. Complete the addition equations and sentences.** / Thực hiện phép tính và hoàn thành câu.

<p><u>Ex:</u>  <math>1 + 2 = \boxed{3}</math></p>	<p>one plus two equals <b>three</b> .</p>
<p>a.  <math>6 - \boxed{\phantom{0}} = 2</math></p>	<p>six minus ..... equals two.</p>
<p>b.  <math>\boxed{\phantom{0}} + 4 = 7</math></p>	<p>..... plus four equals seven.</p>
<p>c.  <math>10 - 5 = \boxed{\phantom{0}}</math></p>	<p>ten minus five equals .....</p>
<p>d.  <math>2 + \boxed{\phantom{0}} = 10</math></p>	<p>Two plus ..... equals ten.</p>
<p>e.  <math>\boxed{\phantom{0}} - 4 = 5</math></p>	<p>..... minus four equals five.</p>

**VI. Match to complete the sentences.** / Nối để hoàn thành các câu.

<p><u>Ex.</u> Three <b>minus</b> one equals ...</p>	<p>six</p>
<p>1. Two <b>plus</b> four equals ...</p>	<p>three</p>
<p>2. Seven <b>minus</b> four equals ...</p>	<p>nine</p>
<p>3. Five <b>plus</b> two equals ...</p>	<p>two</p>
<p>4. Six <b>plus</b> three equals ...</p>	<p>four</p>
<p>5. Eight <b>minus</b> four equals ...</p>	<p>seven</p>