


# ANSWER KEY


**I. Color in the circles to help the dinosaur find his friend.** / Tô màu các hình tròn giúp khủng long tìm bạn của mình.



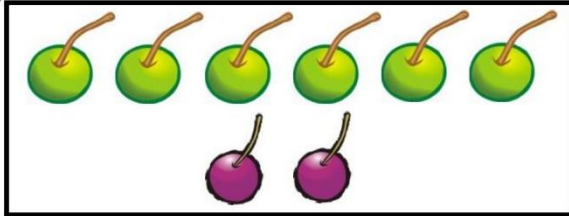
II. Count the fruit and write equations. / Nhìn tranh và viết phép tính.




$$4 + 5 = 9$$




$$3 + 4 = 7$$




$$6 + 2 = 8$$




$$4 + 4 = 8$$




$$5 + 1 = 6$$



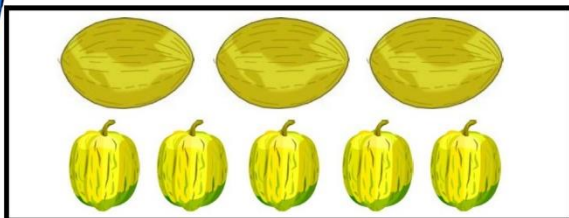
$$6 + 3 = 9$$



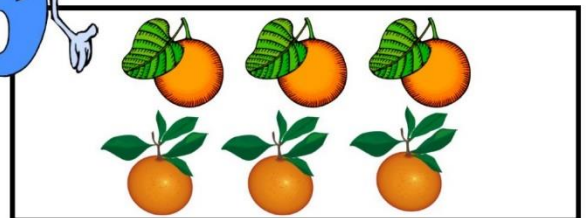
$$7 + 2 = 9$$



$$3 + 2 = 5$$



$$3 + 5 = 8$$





$$3 + 3 = 6$$

III. Complete the subtraction equations. / Thực hiện phép tính..


  $4 - 2 = \underline{2}$

  $4 - 3 = \underline{1}$


  $7 - 1 = \underline{6}$

  $3 - 2 = \underline{1}$

  $8 - 5 = \underline{3}$

  $10 - 7 = \underline{3}$

IV. Color in the art. / Tô màu những hình dưới đây.



HS sẽ tự tô màu sáng tạo

**V. Complete the addition equations and sentences.** / Thực hiện phép tính và hoàn thành câu.

<p><u>Ex:</u>  <math>1 + 2 = \boxed{3}</math></p>	<p>one plus two equals <b>three</b> .</p>
<p>a.  <math>6 - \boxed{4} = 2</math></p>	<p>Six minus <b>four</b> equals two.</p>
<p>b.  <math>\boxed{3} + 4 = 7</math></p>	<p><b>Three</b> plus four equals seven.</p>
<p>c.  <math>10 - 5 = \boxed{5}</math></p>	<p>Ten minus five equals <b>five</b> .</p>
<p>d.  <math>2 + \boxed{8} = 10</math></p>	<p>Two plus <b>eight</b> equals ten.</p>
<p>e.  <math>\boxed{9} - 4 = 5</math></p>	<p><b>Nine</b> minus four equals five.</p>

**VI. Match to complete the sentences.** / Nối để hoàn thành các câu.

<p><u>Ex.</u> Three <b>minus</b> one equals ...</p>	<p>six</p>
<p>1. Two <b>plus</b> four equals ...</p>	<p>three</p>
<p>2. Seven <b>minus</b> four equals ...</p>	<p>nine</p>
<p>3. Five <b>plus</b> two equals ...</p>	<p>two</p>
<p>4. Six <b>plus</b> three equals ...</p>	<p>four</p>
<p>5. Eight <b>minus</b> four equals ...</p>	<p>seven</p>