

TÀI LIỆU ÔN TẬP KHỐI 3 – MÔN TIẾNG ANH TOÁN
(09/03/2020 – 14/03/2020)

Exercise 1: Circle the correct answer. The first one has been done for you.

0) Which number is **greater than 512**?

A. 429

B. 620

C. 359

1) Arrange these numbers in **descending order**: 250, 756, 368, 463

A. 756, 463, 250, 368

B. 250, 368, 463, 756

C. 756, 463, 368, 250

2) Which set of numbers is arranged in **ascending order**?

A. 125, 368, 550, 762

B. 600, 348, 436, 125

C. 234, 556, 765, 350

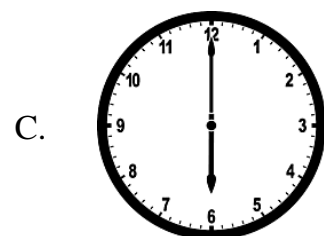
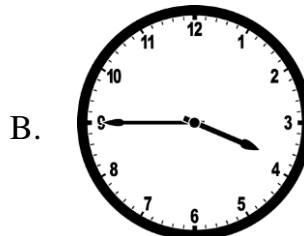
3) Which set of numbers is arranged in **descending order**?

A. 225, 542, 776, 325

B. 256, 533, 389, 125

C. 778, 543, 324, 157

4) It is a quarter past four.



5) What time is it?



A. It's a quarter past eight.

B. It's a quarter to two.

C. It's half past eight.



Exercise 2: Match. The first one has been done for you.

| | |
|------------------------------------|--|
| 0) <i>It's a quarter past two.</i> | A. 505 |
| 1) 756 minus 216 equals ... | B.  |
| 2) 350 plus 155 equals ... | C. equals |
| 3) It's half past four. | D.  |
| 4) 200 plus 130 ... 330. | E. 540 |
| 5) 236 minus 136 equals ... | F. 100 |