

TÀI LIỆU ÔN TẬP KHỐI 1 – MÔN TIẾNG ANH TOÁN
(09/03/2020 – 14/03/2020)

Exercise 1: Circle the correct answer for each question. The first one has been done for you.

0. What number is it?




A. one

B. two

C. three

1. What shape is this?



A. triangle

B. circle

C. square

2. This is a



A. square

B. circle

C. triangle

3. How many monkeys are there?



A. three

B. five

C. seven

4. What number is this?



A. six

B. eight

C. one

5. There are cars.



A. four

B. two

C. seven

Exercise 2: Tick “Yes” or “No”.

0. This is a triangle.



Yes



No

1. This is a **circle**.



Yes



No

2. This  is **bigger** than this  .



Yes

No

3. This  is **smaller** than this  .



Yes

No


4. It is number **nine**.



Yes

No

5. There are **four** oranges.



Yes

No