



**BINHMINH EDUCATION DEVELOPMENT CENTER**

Address: N05-25T2, Hoang Dao Thuy Street, Thanh Xuan District, Ha Noi

Tel: 04 3976 6365 - Web: Binhminhedu.edu.vn

Name: .....

School: .....

Class: .....

**REVIEW SMART MATHS GRADE 1**

**1 Count, match and trace.** / *Đếm, nối và tô từ*

**E.x:**

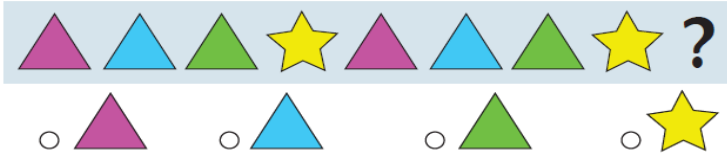
|    |  |       |
|----|--|-------|
| 1. |  | one   |
| 2. |  | ten   |
| 3. |  | three |
| 4. |  | two   |
| 5. |  | five  |
|    |  | four  |

**2 What shapes come next? Color in the bubble next to the correct answer.** / *Nhìn vào dãy hình, tô màu vào chấm tròn để chọn đáp án*

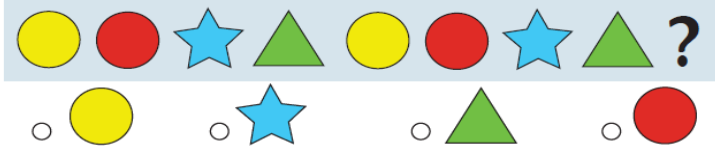
**E.x:**



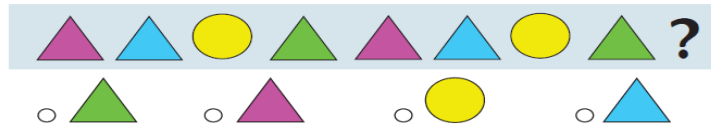
1.




2.



3.



4.

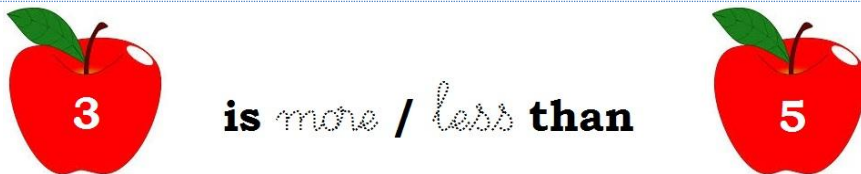


**3 Compare two numbers in each row. Choose the correct answer and trace “more” or “less”.** / So sánh hai chữ số với nhau. Chọn đáp án đúng và tô từ “more” hoặc “less” để hoàn thiện các câu dưới đây.

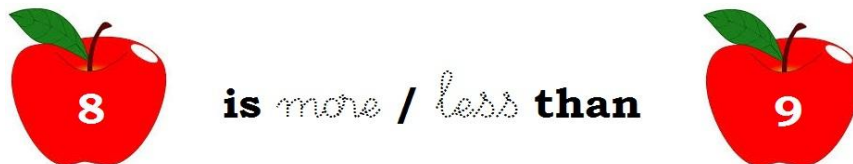
**E.x:**



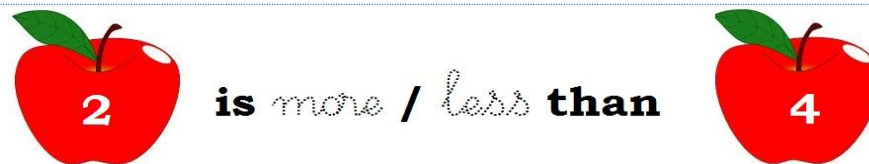
1.



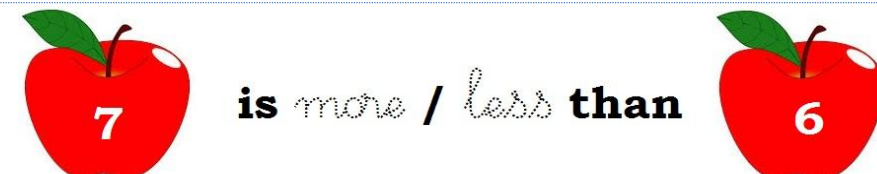
2.



3.



4.





**4 Find numbers in the picture. Color numbers if you see. / Tìm những số được giấu trong tranh. Tô màu vào những con số đó.**



**5 Solve each problem. / Giải các bài toán sau:**


**E.x: There are 2 sea horses in the sea, 2 more sea horses come along. How many sea horses are there altogether?**

|   |   |   |   |   |
|---|---|---|---|---|
| 2 | + | 2 | = | 4 |
|---|---|---|---|---|

There are   4   sea horses altogether.


**1. Jack has 9 balloons. 4 balloons fly away. How many balloons does he have left?**



|  |  |  |  |  |
|--|--|--|--|--|
|  |  |  |  |  |
|--|--|--|--|--|

Jack has            balloons left.

2. Trung has 6 books. Nga has 4 books. How many books do they have altogether?



They have \_\_\_\_\_ books altogether.

3. There are 7 shirts. 2 shirts are dirty. How many shirts are clean?




They are \_\_\_\_\_ shirts.

4. There are 1 red marble, 2 blue marbles and 5 orange marbles. How many marbles are there altogether?



There are \_\_\_\_\_ marbles altogether.

5. Mary has 6 apples. She ate 3 apples. How many apples did she eat left?



She ate \_\_\_\_\_ apples.

**\*\*\* THE END \*\*\***