


NỘI DUNG ÔN TẬP KHỐI 1 – MÔN TIẾNG ANH TOÁN
(17/02/2020 – 22/02/2020)

Exercise 1: Circle the correct answer.

0. What shape is this?



A. triangle

B. circle

C. square

1. What shape is this?



A. circle

B. triangle

C. square

2. What shape is this?



A. triangle

B. square

C. circle

3. What shape is this?



A. circle

B. square

C. triangle

4. This is a ...



A. square

B. triangle

C. circle

5. This is a ...



A. square

B. triangle

C. circle

Exercise 2: Tick the bigger or smaller.

0. Tick the **bigger** circle.



1. Tick the **bigger** clock.



2. Tick the **smaller** apple.





3. Tick the **smaller** triangle.















4. Tick the **bigger** fish.



5. Tick the **smaller** square.



Exercise 3: Tick “Yes” or “No”.

<p>0.</p> 	<p>is <i>smaller</i> than</p>		<p>Yes <input checked="" type="checkbox"/></p>	<p>No <input type="checkbox"/></p>
<p>1.</p> 	<p>is bigger than</p>		<p>Yes <input type="checkbox"/></p>	<p>No <input type="checkbox"/></p>
<p>2.</p> 	<p>is smaller than</p>		<p>Yes <input type="checkbox"/></p>	<p>No <input type="checkbox"/></p>
<p>3.</p> 	<p>is smaller than</p>		<p>Yes <input type="checkbox"/></p>	<p>No <input type="checkbox"/></p>
<p>4.</p> 	<p>is bigger than</p>		<p>Yes <input type="checkbox"/></p>	<p>No <input type="checkbox"/></p>
<p>5.</p> 	<p>is bigger than</p>		<p>Yes <input type="checkbox"/></p>	<p>No <input type="checkbox"/></p>